


# Taylor County Schools

## Day 5


### Second Grade



- 1. Complete this packet on the fifth ICE Day.**
- 2. Write your name on the packet.**
- 3. Return this completed packet the next day after the ICE Pack Day. You will keep the others in the envelope for future ICE Pack Days.**

# Under The Rainbow

Use one word from each cloud to make a compound word.  
Write the compound words on the lines.



---

---

---

---

---

---

---

---

---

---

---

---

---

---

---

---

---

---

---

---

# Opinion Writing

Name: \_\_\_\_\_

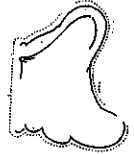
## Prompt

Would you rather have an elephant nose or elephant ears?

## Color One



or



## Intro

---

---

---

## Reason 1

---

---

---

## Reason 2

---

---

---

## Reason 3

---

---

---

## Conclusion

---

---



---

Name \_\_\_\_\_

Date \_\_\_\_\_

# Lending a Hand

Color each shirt that shows a pair of synonyms.




Synonyms are words with  
the same meaning.

**Bonus:** For each uncolored  
shirt, mark out one word. Write a  
synonym for the unmarked word.


# Antonym Match-Up

Antonyms are words with opposite meanings.

large



small



Draw a line to connect the antonyms.

1. happy
2. brave
3. right
4. fast
5. big
6. rude
7. old
8. strong
9. crowded
10. smile
11. close
12. loud
13. ask
14. wild
15. beautiful
16. hard

- young
- far
- afraid
- weak
- little
- tame
- sad
- answer
- ugly
- frown
- slow
- wrong
- easy
- quiet
- empty
- polite

Name \_\_\_\_\_



### ORDERING


Put the numbers in order from least to greatest.

67, 43, 82, 31

\_\_\_\_\_

90, 43, 94, 65

\_\_\_\_\_



### EVEN/ODD

Put an X on the odd numbers.

67	82	44
56	92	
80	23	79
10	51	

### COMPARING

Choose the correct symbol.

<, >, =

67 ○ 89

39 ○ 42

25 ○ 28

### COUNTING

Write the number that comes one before.

\_\_\_\_\_ 75

\_\_\_\_\_ 23

\_\_\_\_\_ 18

\_\_\_\_\_ 50

### ADDITION

Find the sum.

$2 + 4 + 4 =$  \_\_\_\_\_

$7 + 1 + 8 =$  \_\_\_\_\_

$1 + 4 + 9 =$  \_\_\_\_\_

$6 + 7 + 3 =$  \_\_\_\_\_

### PLACE VALUE


I have 9 ones and 3 tens. What number am I? \_\_\_\_\_

I have 1 tens and 8 ones. What number am I? \_\_\_\_\_

### WORD PROBLEM

Read the word problem and solve. Show your work.










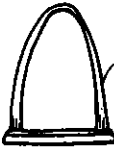
















































Amy frosted 5 vanilla cupcakes and 8 chocolate cupcakes. How many cupcakes did she frost altogether?



Name \_\_\_\_\_

# Shopping for Souvenirs

Color the coins needed to make exact change for each item.

 67¢	       
 31¢	       
 75¢	     
 52¢	      
 85¢	     
 46¢	       
 90¢	      
 60¢	