


Taylor County Schools

Day 2

Second Grade



1. Complete this packet on the second ICE Day.
2. Write your name on the packet.
3. Return this completed packet the next day after the ICE Pack Day. You will keep the others in the envelope for future ICE Pack Days.

Something's Missing!

Review—Punctuation
and capitalization

Name _____

Rewrite the sentences below correctly.

1. who wants to play

2. i want to play ball

3. we won the game

4. let's play again, said pete

5. jan greg and marvin want to play

6. i like the month of december

7. i want to go to lincoln nebraska



Choose a punctuation mark you like. Use it in a sentence.

Opinion Writing

Name: _____


Prompt

Would you rather spend the night in a haunted house or Dracula's Castle?

Color One



or



Intro

Reason 1


Reason 2

Reason 3


Conclusion

Action Verbs

A verb shows action.



The car
struggled up
the hill.




The car
sped down
the hill.

Write the verb for each sentence on the line provided.

1. Barbara plays basketball well. _____
2. The bird flies over my head. _____
3. The bicycle makes Frank happy. _____
4. The children ran to the playground. _____
5. The balloon popped in front of me. _____
6. The pen ran out of ink. _____
7. I fell on the sidewalk. _____
8. I eat a piece of fruit each day. _____
9. The old horse stood quietly in the field. _____
10. Our teacher reads a story to us each day. _____

Name _____

SENTENCE FIXERS



Directions: Circle the errors in each sentence.
Rewrite each sentence correctly.

1. there are fiv chickens in the yard

2. the big dog jumped en the pond

3. whut is your favorite cartoon

4. i like to swem in the summer

5. do you listen to the Radio in the car

Math

Name: _____

Circle the hundreds.
Put an X on the tens.
Underline the ones.

856 953 356

264 725 105

659 326 335

Find the missing addend.

$$5 + \underline{\quad} = 6$$

$$3 + \underline{\quad} = 5$$

$$2 + \underline{\quad} = 5$$

$$7 + \underline{\quad} = 8$$

$$0 + \underline{\quad} = 5$$

$$3 + \underline{\quad} = 6$$

Practice your fast math.

$$5 + 6 = \underline{\quad}$$

$$4 + 5 = \underline{\quad}$$

$$3 + 8 = \underline{\quad}$$

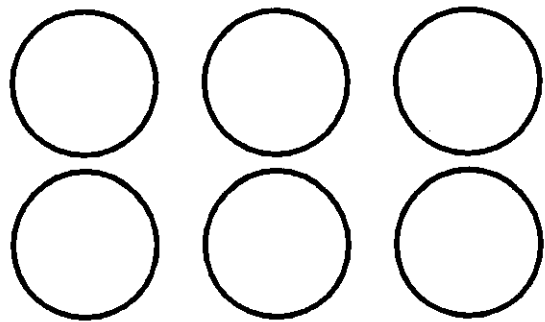
$$5 + 5 = \underline{\quad}$$

$$6 + 6 = \underline{\quad}$$

$$8 + 2 = \underline{\quad}$$

$$9 + 4 = \underline{\quad}$$

Pair up the circles. Circle if this set is even or odd.



Even?

Odd?

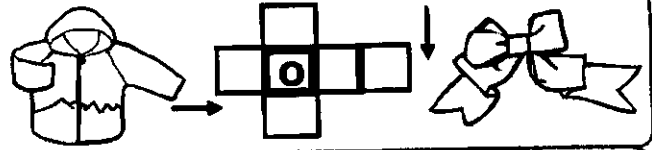
Even numbers are paired up with no leftovers.
Odd numbers are paired up with one leftover.

seventy-nine



The tatarian in my yard gives me shade in the summer. In the fall, the leaves turn yellow. The tatarian's seeds turn brown before dropping to the ground.

What is a tatarian?



Write a sentence about something you might see on the road.

- I used correct capitals. I used correct punctuation. I used my best spelling. My sentence makes sense.

Sight Words

Write each word. Circle the vowels.

know know

float _____

luck _____

age _____

growing

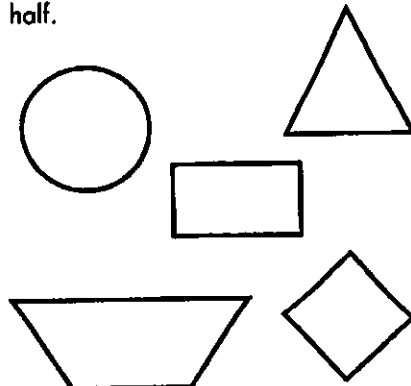
9

Add or subtract to complete the equations.

+9		-9		9	7
2		18		<u>+4</u>	<u>+9</u>
6		10		10	9
1		11		<u>-9</u>	<u>-2</u>
12		15		9	3
7		21		<u>-3</u>	<u>+6</u>
5		14			

Howie eats 2 bowls of oatmeal for breakfast every day. How many bowls does he eat in 3 days?

Draw a line to partition each shape in half.



tens	ones

10 + 10 + 10 = _____

10 30 100