

Taylor County Schools


Day 5

1st Grade



1. Complete this packet on fifth ICE Day.
2. Write your name on the booklet.
3. A number line can be found at the back of your packet to assist with the math pages.
4. Return the completed packet to your teacher the day school resumes.


Read a book of your choice, Draw a picture of your favorite part of the story, and Write 2 sentences about the story.



Two sets of primary writing lines. Each set consists of a solid top line, a dashed middle line, and a solid bottom line, providing a guide for letter height and placement.

One Fish, Two Fish Math

Name: _____



$$8 + \underline{\quad} = 16$$

$$9 + 11 = \underline{\quad}$$

$$17 - \underline{\quad} = 2$$

$$14 + \underline{\quad} = 20$$

$$19 - 5 = \underline{\quad}$$

$$13 - \underline{\quad} = 4$$

$$15 + \underline{\quad} = 18$$

$$18 - \underline{\quad} = 3$$

$$10 + 10 = \underline{\quad}$$

Name: _____

Mystery Picture

100's Chart



52,	53,
58,	59,
63,	68,
73,	78,
83,	84,
87,	88,
95,	96.




3,	4,	5,	6,
7,	8,	23,	
24,	25,	26,	
27,	28,	43,	
44,	45,	46,	
47,	48,	81,	
90,	92,	93,	
98,	99.		

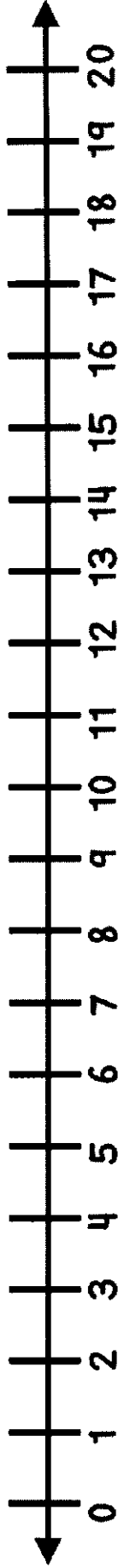


1,	2,	9,	10,	11,	12,
19,	20,	21,	22,	29,	
30,	31,	32,	39,	40,	
41,	42,	49,	50,	51,	
60,	61,	62,	69,	70,	
71,	72,	79,	80,	82,	
89,	91,	94,	97,	100.	

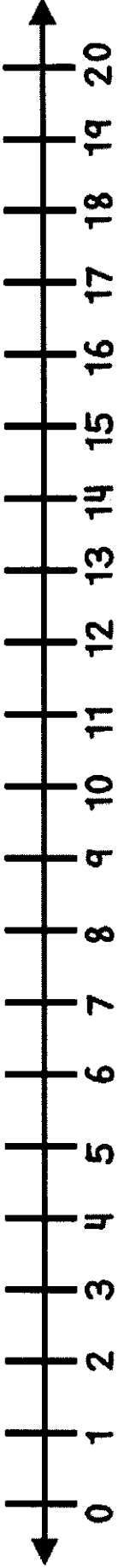
1	2	3	4	5	6	7	8	9	10
11	12	13	14	15	16	17	18	19	20
21	22	23	24	25	26	27	28	29	30
31	32	33	34	35	36	37	38	39	40
41	42	43	44	45	46	47	48	49	50
51	52	53	54	55	56	57	58	59	60
61	62	63	64	65	66	67	68	69	70
71	72	73	74	75	76	77	78	79	80
81	82	83	84	85	86	87	88	89	90
91	92	93	94	95	96	97	98	99	100



Number Line



Number Line



Number Line

