

Taylor County Schools


Day 3

1st Grade



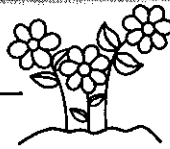
1. Complete this packet on third ICE Day.
2. Write your name on the booklet.
3. A number line can be found at the back of your packet to assist with the math pages.
4. Return the completed packet to your teacher the day school resumes.

Read a book of your choice, Draw a picture of your favorite part of the story, and Write 2 sentences about the story.



Handwriting practice lines consisting of multiple sets of three horizontal lines: a solid top line, a dashed middle line, and a solid bottom line.

Name _____



Addition or Subtraction

Add to find the sum, or subtract to find the difference

$$\begin{array}{r} 6 \\ + 2 \\ \hline \end{array}$$

$$\begin{array}{r} 12 \\ - 4 \\ \hline \end{array}$$

$$\begin{array}{r} 9 \\ - 3 \\ \hline \end{array}$$

$$\begin{array}{r} 15 \\ - 1 \\ \hline \end{array}$$

$$\begin{array}{r} 6 \\ + 7 \\ \hline \end{array}$$

$$\begin{array}{r} 8 \\ + 10 \\ \hline \end{array}$$

$$\begin{array}{r} 7 \\ + 5 \\ \hline \end{array}$$

$$\begin{array}{r} 18 \\ - 6 \\ \hline \end{array}$$

$$\begin{array}{r} 16 \\ - 2 \\ \hline \end{array}$$

$$\begin{array}{r} 6 \\ + 6 \\ \hline \end{array}$$

$$\begin{array}{r} 7 \\ + 8 \\ \hline \end{array}$$

$$\begin{array}{r} 17 \\ - 2 \\ \hline \end{array}$$


$$\begin{array}{r} 6 \\ - 0 \\ \hline \end{array}$$

$$\begin{array}{r} 3 \\ + 3 \\ \hline \end{array}$$

$$\begin{array}{r} 5 \\ + 4 \\ \hline \end{array}$$

$$\begin{array}{r} 2 \\ + 2 \\ \hline \end{array}$$

$$\begin{array}{r} 14 \\ - 4 \\ \hline \end{array}$$



Name _____ Date _____

Hundreds chart puzzle

Color to reveal the hidden picture.

Purple: 86, 75, 66, 84, 65, 76, 74, 85, 64

Pink: 54, 45, 56, 44, 55, 46

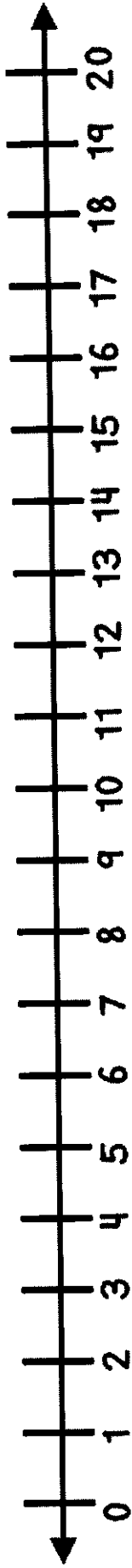
Dark brown: 5, 13, 17, 3, 7, 23, 27, 6, 4

Tan: 94, 63, 26, 47, 53, 96, 43, 35, 24, 48, 25, 16, 38, 14, 28, 15

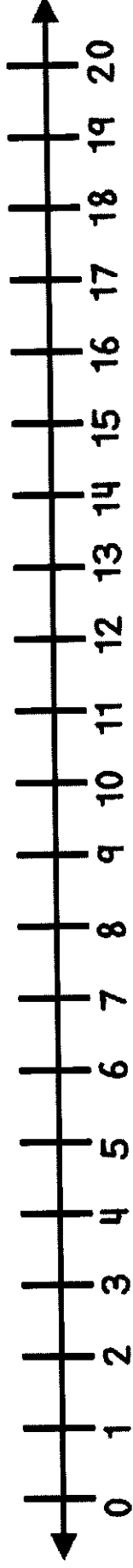
Draw small black circles in 14 and 16.

1	2	3	4	5	6	7	8	9	10
11	12	13	14	15	16	17	18	19	20
21	22	23	24	25	26	27	28	29	30
31	32	33	34	35	36	37	38	39	40
41	42	43	44	45	46	47	48	49	50
51	52	53	54	55	56	57	58	59	60
61	62	63	64	65	66	67	68	69	70
71	72	73	74	75	76	77	78	79	80
81	82	83	84	85	86	87	88	89	90
91	92	93	94	95	96	97	98	99	100

Number Line



Number Line



Number Line

